

- 15) Write the first, fifth, and sixth letters of the word **rectangle**.  
What word did you spell?

a) ran      b) rat      c) tag      d) tan

- 16) Patricia practices piano for one hour each day in July and August. How many hours all together did she practice?

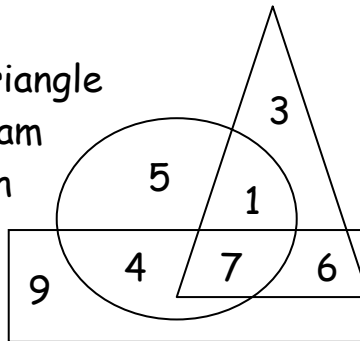
a) 2      b) 60      c) 61      d) 62



- 17) Hilarious Harry invited 7 friends to his comedy show. All but 2 went to the show. How many did **not** go?

a) 2      b) 5      c) 6      d) 11


- 18) I am a number inside the triangle and inside the rectangle. I am outside of the circle. Which number am I?



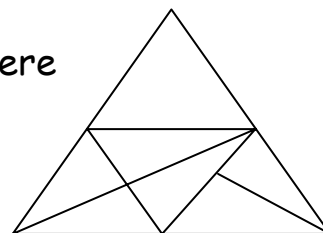
a) 3      b) 4      c) 5      d) 6

- 19) Veronica likes video games. She takes \$3 to the arcade. Each game costs 50¢. How many games can she play before running out of money?

a) 3      b) 6      c) 10      d) 12



- 20) How many triangles of all sizes are there in this diagram?



a) 6      b) 9      c) 15      d) 20